

NOME: \_\_\_\_\_

TURMA: \_\_\_\_\_

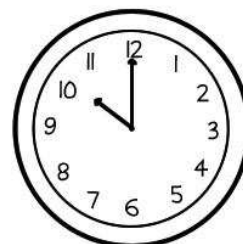
### ATIVIDADE SOBRE AS HORAS

1) LIGUE O RELÓGIO DIGITAL CUJO O HORÁRIO MARCADO ESTEJA DE ACORDO COM O RELÓGIO ANALÓGICO:

23:30

•


•



21:50

•

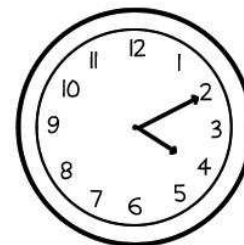
•



16:10

•

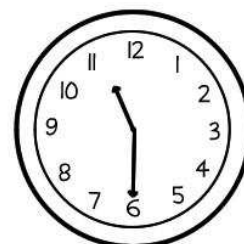
•




10:00

•


•




2) QUE HORAS SÃO?



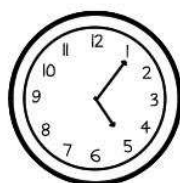
\_\_\_\_ : \_\_\_\_



\_\_\_\_ : \_\_\_\_



\_\_\_\_ : \_\_\_\_



\_\_\_\_ : \_\_\_\_